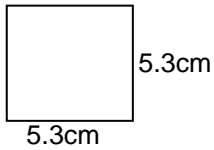


VICTOR
LEVEL C
PRACTICE SHEET 2
Geometry

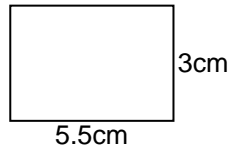
May use a calculator

1. Find the perimeter and area of each figure.



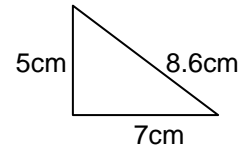
P=_____ cm

A=_____ cm²



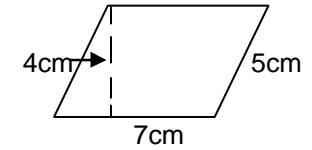
P=_____ cm

A=_____ cm²



P=_____ cm

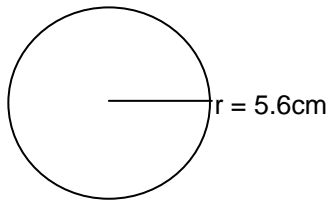
A=_____ cm²



P=_____ cm

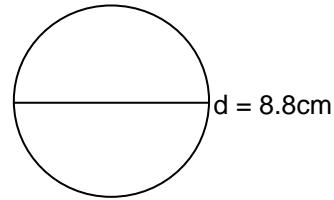
A=_____ cm²

2. Find the circumference and area of each circle.



C=_____ cm

A=_____ cm²



C=_____ cm

A=_____ cm²